

Jméno a příjmení:

## TEST – TOPOGRAFICKÉ ZNAČKY (starší žáci)

### Zadání

Pořádně si prohlédni topografické značky a napiš k nim jejich správný název.



\_\_\_\_\_



\_\_\_\_\_



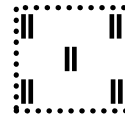
\_\_\_\_\_



\_\_\_\_\_



\_\_\_\_\_



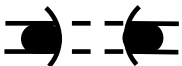
\_\_\_\_\_



\_\_\_\_\_

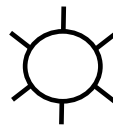


\_\_\_\_\_



tunel  $\frac{8-12}{350}$

\_\_\_\_\_



\_\_\_\_\_



\_\_\_\_\_



\_\_\_\_\_



\_\_\_\_\_




\_\_\_\_\_



\_\_\_\_\_



\_\_\_\_\_



\_\_\_\_\_



\_\_\_\_\_



\_\_\_\_\_



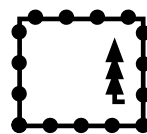
\_\_\_\_\_



\_\_\_\_\_



\_\_\_\_\_




\_\_\_\_\_



S64

\_\_\_\_\_



Šachta

Ag

\_\_\_\_\_